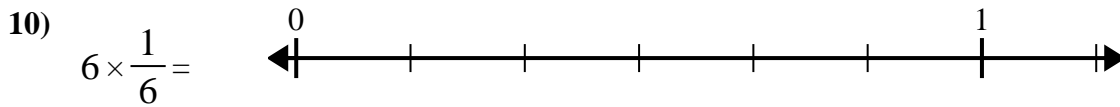
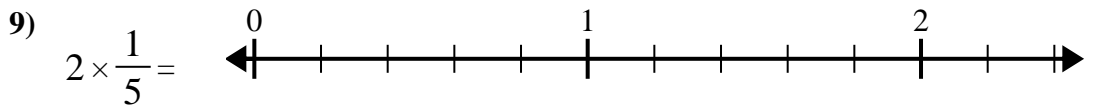
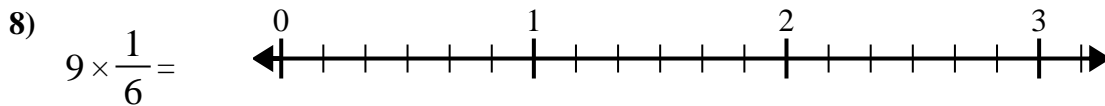
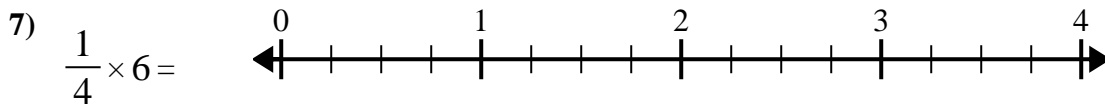
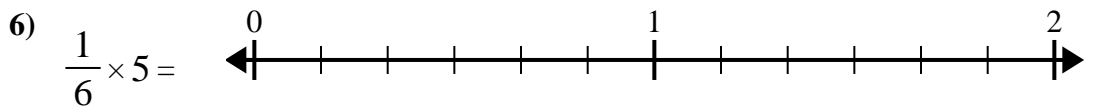
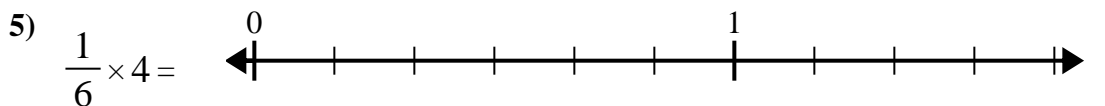
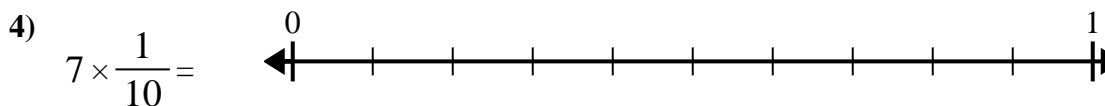
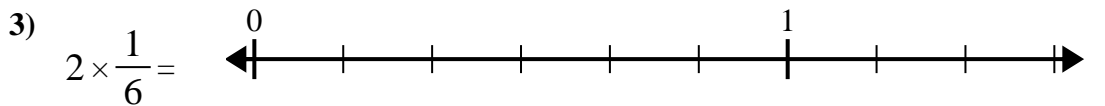
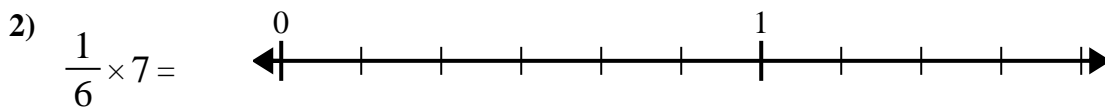
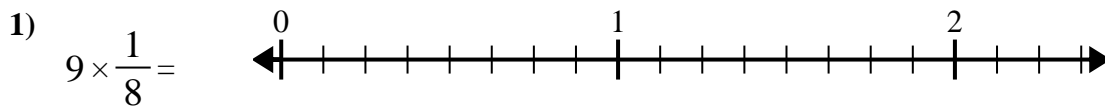




Use the numberline to solve.

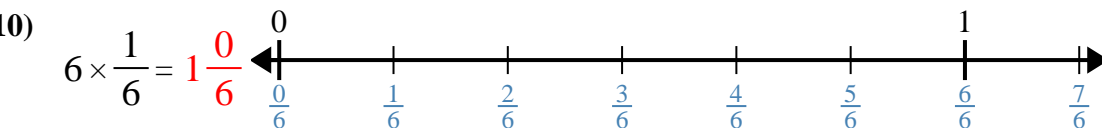
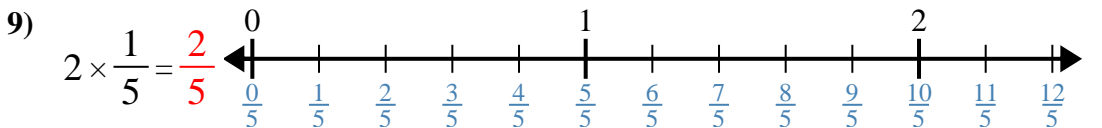
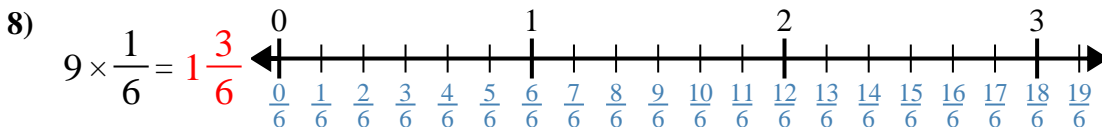
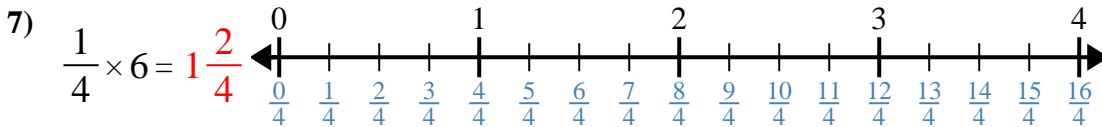
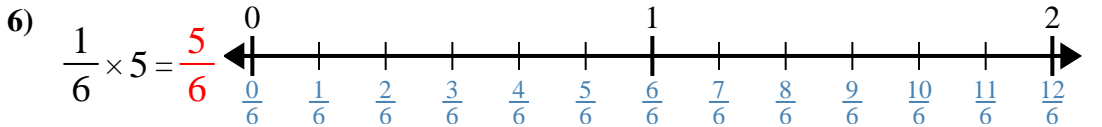
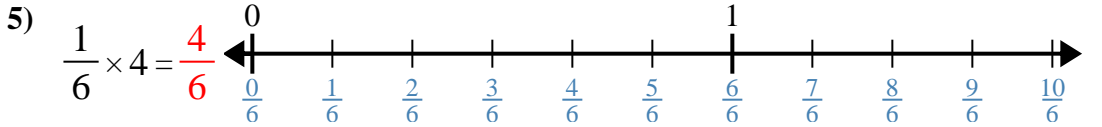
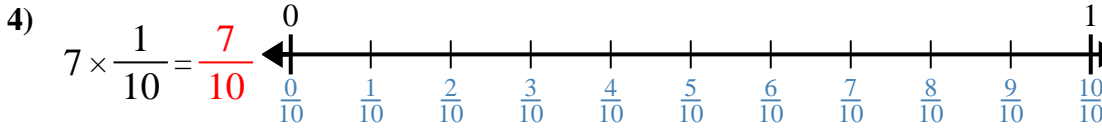
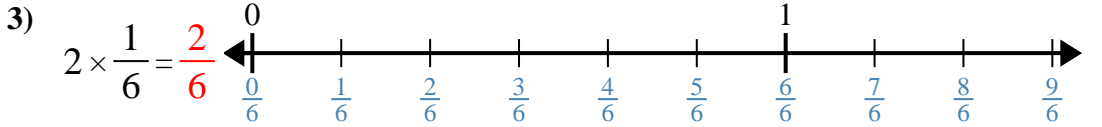
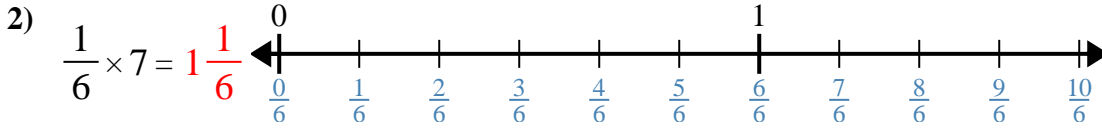
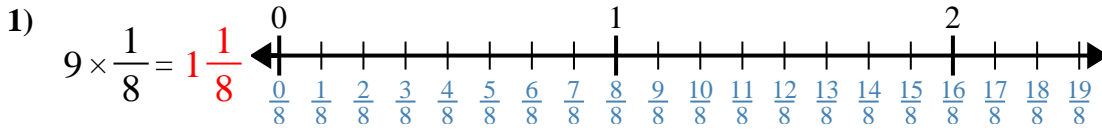


Answers

1. _____
2. _____
3. _____
4. _____
5. _____
6. _____
7. _____
8. _____
9. _____
10. _____



Use the numberline to solve.



Answers

1. $1\frac{1}{8}$

2. $1\frac{1}{6}$

3. $\frac{2}{6}$

4. $\frac{7}{10}$

5. $\frac{4}{6}$

6. $\frac{5}{6}$

7. $1\frac{2}{4}$

8. $1\frac{3}{6}$

9. $\frac{2}{5}$

10. $1\frac{0}{6}$



Use the numberline to solve.

$1\frac{2}{4}$

$1\frac{3}{6}$

$\frac{4}{6}$

$1\frac{1}{8}$

$\frac{7}{10}$

$\frac{2}{5}$

$\frac{5}{6}$

$1\frac{1}{6}$

$1\frac{0}{6}$

$\frac{2}{6}$

Answers

1)

1. _____

2)

2. _____

3)

3. _____

4)

4. _____

5)

5. _____

6)

6. _____

7)

7. _____

8)

8. _____

9)

9. _____

10)

10. _____